



**Cambridge International Examinations**  
Cambridge Ordinary Level

CANDIDATE  
NAME

CENTRE  
NUMBER

--	--	--	--	--

CANDIDATE  
NUMBER

--	--	--	--



**MATHEMATICS (SYLLABUS D)**

**4024/12**

Paper 1

**October/November 2016**

**2 hours**

Candidates answer on the Question Paper.

Additional Materials: Geometrical instruments

**READ THESE INSTRUCTIONS FIRST**

Write your Centre number, candidate number and name on all the work you hand in.

Write in dark blue or black pen.

You may use an HB pencil for any diagrams or graphs.

Do not use staples, paper clips, glue or correction fluid.

**DO NOT WRITE IN ANY BARCODES.**

Answer **all** questions.

If working is needed for any question it must be shown in the space below that question.

Omission of essential working will result in loss of marks.

**ELECTRONIC CALCULATORS MUST NOT BE USED IN THIS PAPER.**

The number of marks is given in brackets [ ] at the end of each question or part question.

The total of the marks for this paper is 80.

This document consists of **20** printed pages.

**ELECTRONIC CALCULATORS MUST NOT BE USED IN THIS PAPER.**

1 (a) Evaluate  $9.03 - (4.273 + 2.3)$ .

*Answer* ..... [1]

(b) Evaluate  $\frac{8}{9} - \frac{6}{7}$ .

*Answer* ..... [1]

---

2 Given that  $192 \times 64.3 = 12\,345.6$ , **write down** the values of

(a)  $0.192 \times 643$ ,

*Answer* ..... [1]


(b)  $\frac{12.3456}{192}$ .

*Answer* ..... [1]

---

3


3 (a)



In the diagram, five small squares are shaded.

Shade **one more** small square, so that the diagram has exactly one line of symmetry. [1]

(b)



In the diagram, three small squares are shaded.

Shade **one more** small square, so that the diagram has rotational symmetry of order 4. [1]

---

- 4 (a) The total cost of 3 pencils is \$1.23 .

Find the total cost of 5 pencils.

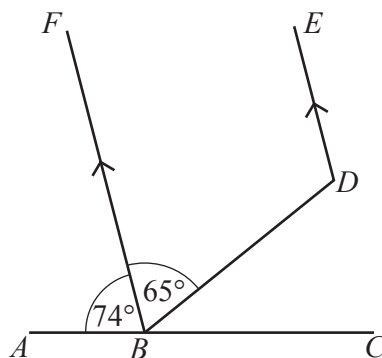
Answer \$ ..... [1]

- (b) Arrange the following in order, starting with the smallest.

74%      -0.7       $0.\dot{7}$        $-\frac{3}{4}$

Answer ..... , ..... , ..... , ..... [1]  
smallest

5



In the diagram,  $ABC$  is a straight line and  $BF$  is parallel to  $DE$ .  
 $\hat{FBA} = 74^\circ$  and  $\hat{DBF} = 65^\circ$ .

- (a) Find  $\hat{CBD}$ .

Answer  $\hat{CBD} =$  ..... [1]

- (b) Find reflex  $\hat{BDE}$ .

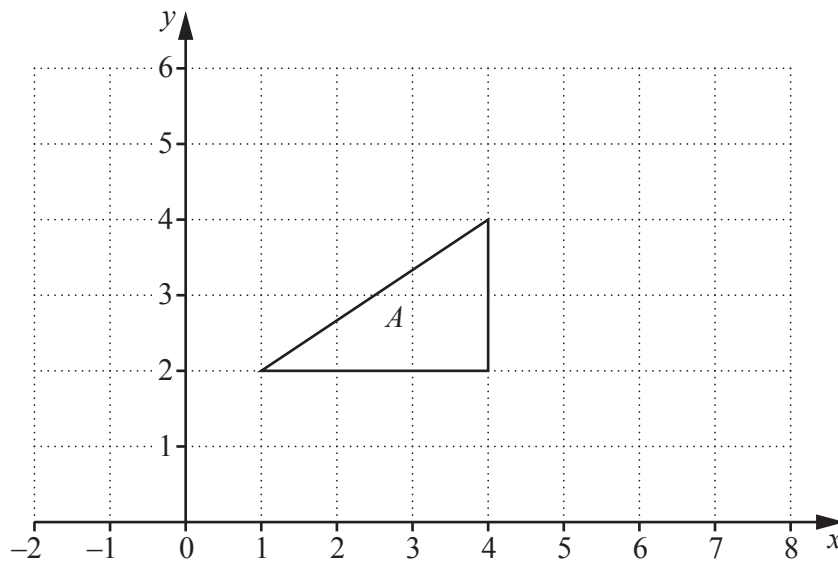
Answer reflex  $\hat{BDE} =$  ..... [1]

- 6 By making suitable approximations, estimate the value of  $\frac{\sqrt{3.98} \times 602.3}{2.987}$ .  
Show clearly the approximations you use.

Answer ..... [2]

---

7



The diagram shows triangle *A*.  
Triangle *A* is mapped onto triangle *B* by an enlargement.  
The enlargement has centre (3, 3) and scale factor  $-2$ .

Draw and label triangle *B*.

[2]

---

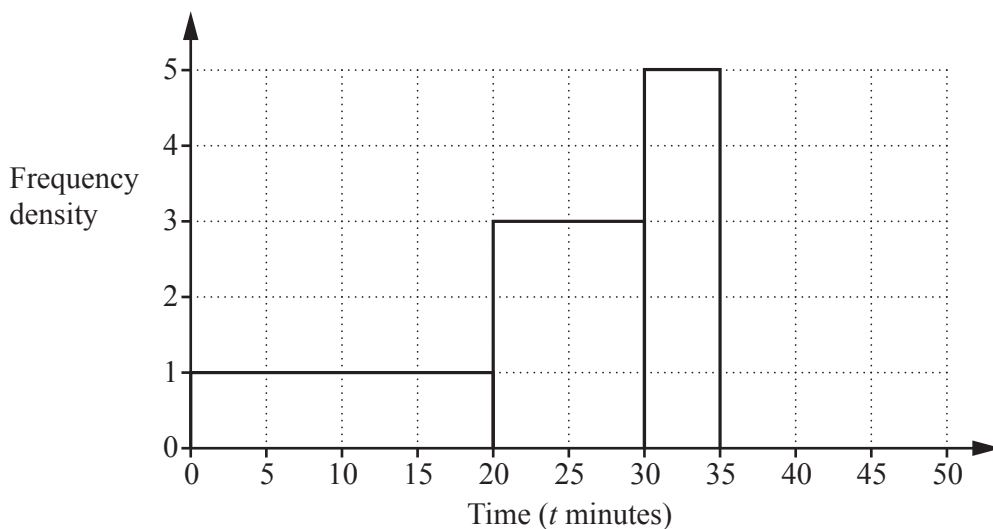
8 (a) Write the number 513 000 in standard form.

Answer ..... [1]

(b) Expressing your answer in standard form, evaluate  $(4 \times 10^{-5}) \times (6 \times 10^{-4})$ .

Answer ..... [2]

9



The diagram shows part of the histogram which represents the distribution of times taken by some people to travel to work.

(a) Complete the table.

Time ( $t$ minutes)	$0 < t \leq 20$	$20 < t \leq 30$	$30 < t \leq 35$	$35 < t \leq 50$
Frequency		30		30

[2]

(b) Complete the histogram.

[1]

10

$$f(x) = 4 + 3x$$

(a) Find  $f\left(-2\frac{1}{2}\right)$ .

Answer ..... [1]

(b) Find  $f^{-1}(5)$ .

Answer ..... [2]

---

11  $y$  varies inversely as the square of  $x$ .

(a) When  $x = 2, y = 9$ .

Find the value of  $y$  when  $x = 3$ .

Answer  $y =$  ..... [2]

(b) When  $x = n, y = p$ .

Write down an expression for  $y$ , in terms of  $p$ , when  $x = 2n$ .

Answer ..... [1]

---

- 12 A school recorded the number of absent students over a 50-day period. The results are given in the table.

Number of absent students	0	1	2	3	4	5 or more
Number of days	25	15	6	3	1	0

- (a) Write down the mode.

*Answer* ..... [1]

- (b) Calculate the mean.

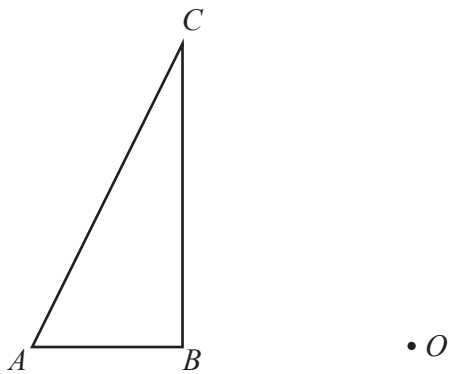
*Answer* ..... [2]

---



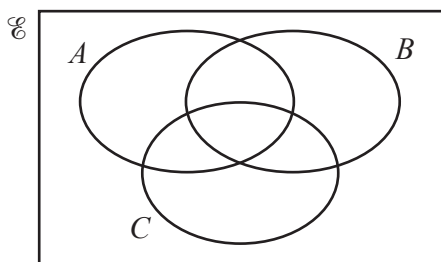
13 Triangle  $ABC$  is mapped onto triangle  $A'B'C'$  by a rotation, centre  $O$ , through  $110^\circ$  clockwise.

Draw and label triangle  $A'B'C'$ .



[3]

14 (a) In the Venn diagram, shade the region which represents the subset  $(A \cap B') \cup C$ .



[1]

(b) In a group of 36 students,

23 study Spanish,  
17 study French,  
4 study neither Spanish nor French.

By drawing a Venn diagram, or otherwise, find the number of students who study both Spanish and French.

*Answer* ..... [2]

15 Solve the simultaneous equations.

$$3x + y = 9$$

$$2x + 3y = -8$$

*Answer*  $x =$  .....

$y =$  ..... [3]

16 (a) Evaluate  $3^2 + 3^1 + 3^0$ .

Answer ..... [1]

(b) Evaluate  $\left(\frac{4}{3}\right)^{-2}$ .

Answer ..... [1]

(c) Simplify  $(16y^6)^{\frac{1}{2}}$ .

Answer ..... [1]

---

17 (a) Some money is shared between Ali, Ben and Carl in the ratio 5 : 3 : 2.  
Ben receives \$60.


How much money is shared?

Answer \$ ..... [1]

(b) Express the ratio  $3\frac{1}{2}$  hours : 14 minutes in the form  $k : 1$ .

Answer ..... : 1 [2]

18



Four cards are marked with the numbers 1, 2, 3 and 4.  
 One card is chosen at random.  
 A second card is then chosen, at random, from the remaining three cards.  
 The sum of the numbers on the two chosen cards is calculated.

(a) Complete the table to show the possible outcomes.

		First card			
		1	2	3	4
Second card	1	1	2	3	4
	2	1	2	3	4
	3	1	2	3	4
	4	1	2	3	4

[1]

(b) What is the probability that the sum is less than 2?

Answer ..... [1]

(c) What is the probability that the sum is greater than 5?

Answer ..... [1]

19 A box has a mass of 1.7 kg, correct to the nearest 0.1 kg.

(a) Write down the lower bound for the mass of the box.

Answer ..... kg [1]

(b) The box holds 100 jars.  
 Each jar has a mass of 140 grams, correct to the nearest 10 grams.

Calculate the lower bound of the **total** mass of the box and 100 jars.  
 Give your answer in kilograms.

Answer ..... kg [2]



20 Solve the equation  $\frac{2x-1}{4} + \frac{x-2}{3} = 2$  .

*Answer*  $x = \dots\dots\dots$  [3]

---

21 [The volume of a sphere is  $\frac{4}{3}\pi r^3$ ]

During a storm, raindrops fall into a cylinder which stands on horizontal ground.  
The cylinder was empty before the storm started.

The cylinder has radius 20 mm.

Each raindrop is a sphere of radius 2 mm.

After the storm, the depth of water in the cylinder is 16 mm.

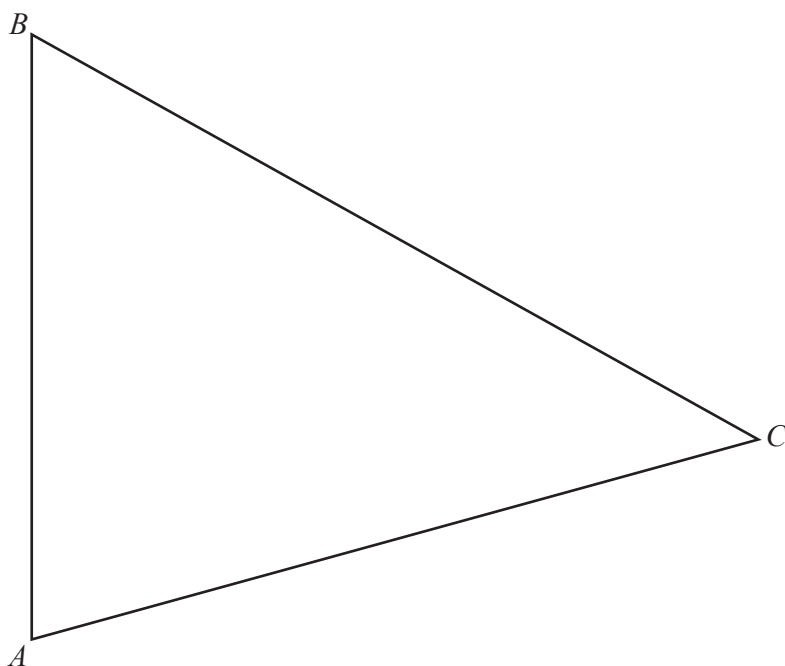
Calculate the number of raindrops that fell into the cylinder.

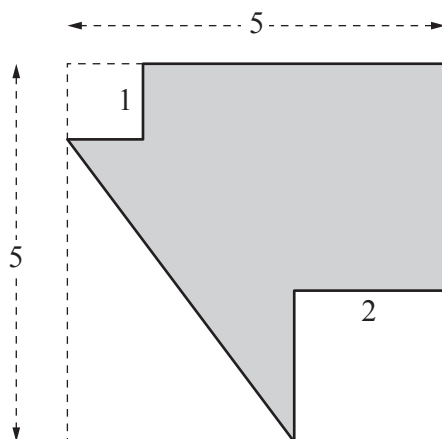
*Answer* ..... [3]

---

22 The diagram shows triangle  $ABC$ .

- (a) Construct the locus of points, **inside** triangle  $ABC$ , that are equidistant from  $A$  and  $B$ . [1]
- (b) Construct the locus of points, **inside** triangle  $ABC$ , that are equidistant from  $AB$  and  $BC$ . [1]
- (c) On the diagram, shade the region **inside** triangle  $ABC$  which contains the points that are nearer to  $A$  than to  $B$  and nearer to  $BC$  than  $AB$ . [1]





The diagram shows a square piece of card, from which a triangle and two small squares are removed. All lengths on the diagram are in centimetres.

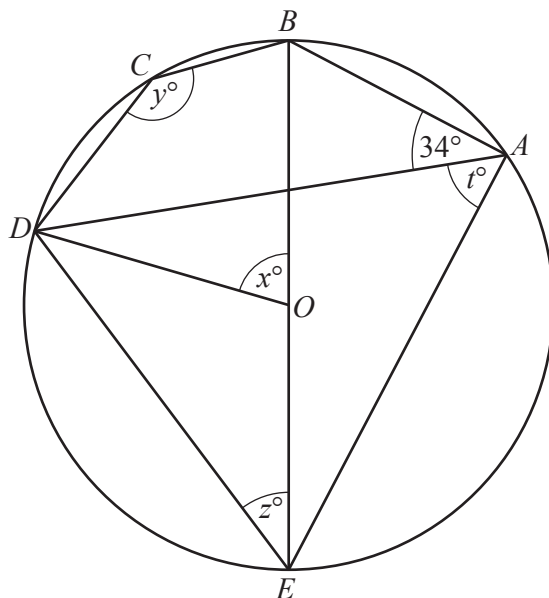
(a) Calculate the area of the shaded card.

*Answer* ..... cm<sup>2</sup> [2]

(b) Calculate the perimeter of the shaded card.

*Answer* ..... cm [2]





In the diagram,  $A$ ,  $B$ ,  $C$ ,  $D$  and  $E$  lie on the circle, centre  $O$ .  
 $BOE$  is a straight line.  
 $\hat{DAB} = 34^\circ$ .

(a) Find  $x$ .

Answer  $x = \dots\dots\dots$  [1]

(b) Find  $y$ .

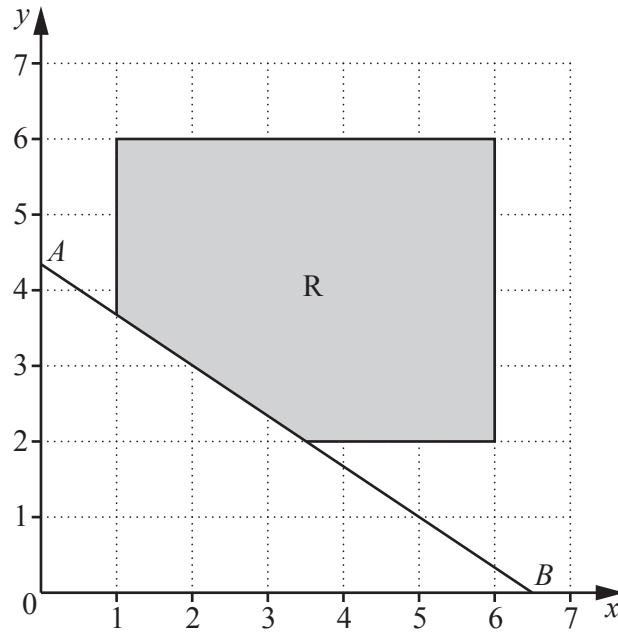
Answer  $y = \dots\dots\dots$  [1]

(c) Find  $z$ .

Answer  $z = \dots\dots\dots$  [1]

(d) Find  $t$ .

Answer  $t = \dots\dots\dots$  [1]



In the diagram, the line  $3y + 2x = 13$  meets the axes at  $A$  and  $B$ .

- (a) Find the coordinates of  $A$ .

Answer (....., .....) [1]

- (b) The shaded region  $R$  is defined by five inequalities.  
Two of these are  $x \leq 6$  and  $y \leq 6$ .

Write down the other three inequalities.

Answer .....

.....

..... [2]

- (c) The point  $P$  is in the shaded region  $R$ .

Given that  $AP$  is as large as possible, write down the coordinates of  $P$ .

Answer (....., .....) [1]

26 Two sequences have 1, 3, 5 as their first three terms.

(a) In the first sequence, each term is 2 more than the term before it.

(i) Find an expression, in terms of  $n$ , for the  $n$ th term.

Answer ..... [1]

(ii) The  $k$ th term of this sequence is 841.

Find the value of  $k$ .

Answer  $k =$  ..... [1]

(b) The  $n$ th term of the second sequence is

$$2^{n-1} - \frac{(n-1)(n-4)}{2}.$$

(i) Find the fourth term of this sequence.

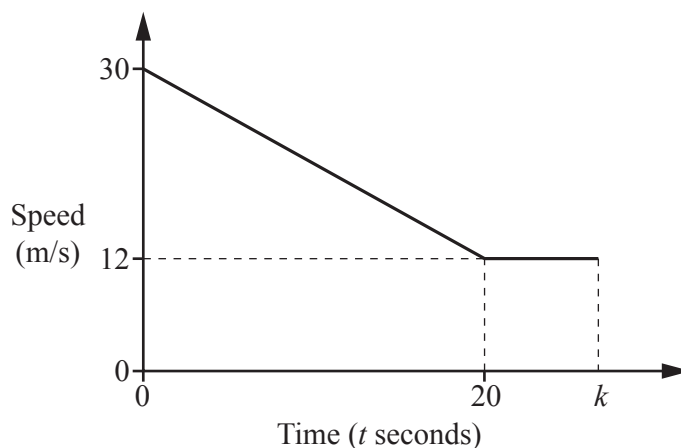
Answer ..... [1]

(ii) Find the fifth term of this sequence.

Answer ..... [1]

---

Question 27 is printed on the next page



The diagram shows the speed-time graph of a car which slows down from 30 m/s to 12 m/s in 20 seconds, and then continues at a speed of 12 m/s.

- (a) Find the retardation when  $t = 10$ .

Answer ..... m/s<sup>2</sup> [1]

- (b) Find the distance travelled by the car between  $t = 0$  and  $t = 20$ .

Answer ..... m [2]

- (c) The distance travelled by the car between  $t = 20$  and  $t = k$  is 60 m.

Find the value of  $k$ .

Answer  $k =$  ..... [2]

---

Permission to reproduce items where third-party owned material protected by copyright is included has been sought and cleared where possible. Every reasonable effort has been made by the publisher (UCLES) to trace copyright holders, but if any items requiring clearance have unwittingly been included, the publisher will be pleased to make amends at the earliest possible opportunity.

To avoid the issue of disclosure of answer-related information to candidates, all copyright acknowledgements are reproduced online in the Cambridge International Examinations Copyright Acknowledgements Booklet. This is produced for each series of examinations and is freely available to download at [www.cie.org.uk](http://www.cie.org.uk) after the live examination series.

Cambridge International Examinations is part of the Cambridge Assessment Group. Cambridge Assessment is the brand name of University of Cambridge Local Examinations Syndicate (UCLES), which is itself a department of the University of Cambridge.