

Cambridge  
International  
AS & A Level

**Cambridge Assessment International Education**  
Cambridge International Advanced Subsidiary and Advanced Level


CANDIDATE  
NAME

CENTRE  
NUMBER

--	--	--	--	--

CANDIDATE  
NUMBER

--	--	--	--



**PHYSICS**

**9702/52**

Paper 5 Planning, Analysis and Evaluation

**October/November 2019**

**1 hour 15 minutes**

Candidates answer on the Question Paper.

No Additional Materials are required.

**READ THESE INSTRUCTIONS FIRST**

Write your centre number, candidate number and name on all the work you hand in.

Write in dark blue or black pen.

You may use an HB pencil for any diagrams or graphs.

Do not use staples, paper clips, glue or correction fluid.

DO **NOT** WRITE IN ANY BARCODES.

Answer **all** questions.

Electronic calculators may be used.

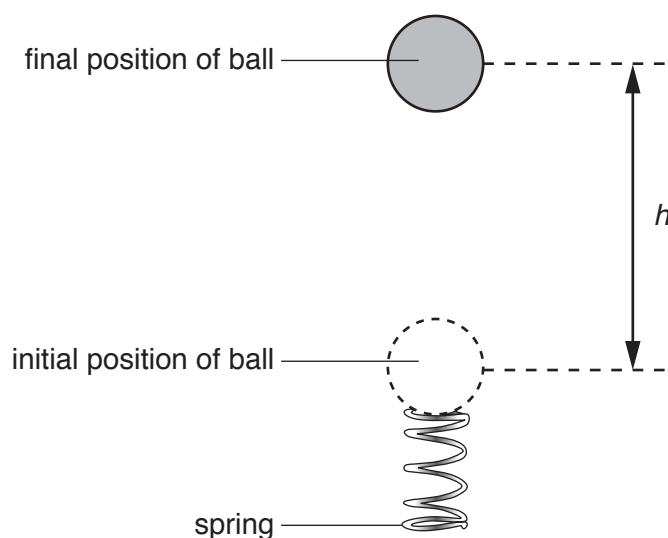
You may lose marks if you do not show your working or if you do not use appropriate units.

At the end of the examination, fasten all your work securely together.

The number of marks is given in brackets [ ] at the end of each question or part question.

This document consists of **8** printed pages.

- 1 A student is investigating the maximum height reached by a light plastic ball when it is launched vertically from a compressed spring, as shown in Fig. 1.1.



**Fig. 1.1**

It is suggested that the maximum height  $h$  of the ball and the compression  $x$  of the spring are related by the equation

$$\frac{4\pi r^3 \rho g h}{3} = \frac{1}{2} k x^2$$

where  $r$  is the radius of the ball,  $\rho$  is the density of the ball,  $g$  is the acceleration of free fall and  $k$  is the spring constant of the spring.

Design a laboratory experiment to test the relationship between  $h$  and  $x$ . Explain how your results could be used to determine a value for  $\rho$ .

You should draw a diagram, on page 3, showing the arrangement of your equipment. In your account you should pay particular attention to:

- the procedure to be followed
- the measurements to be taken
- the control of variables
- the analysis of the data
- any safety precautions to be taken.

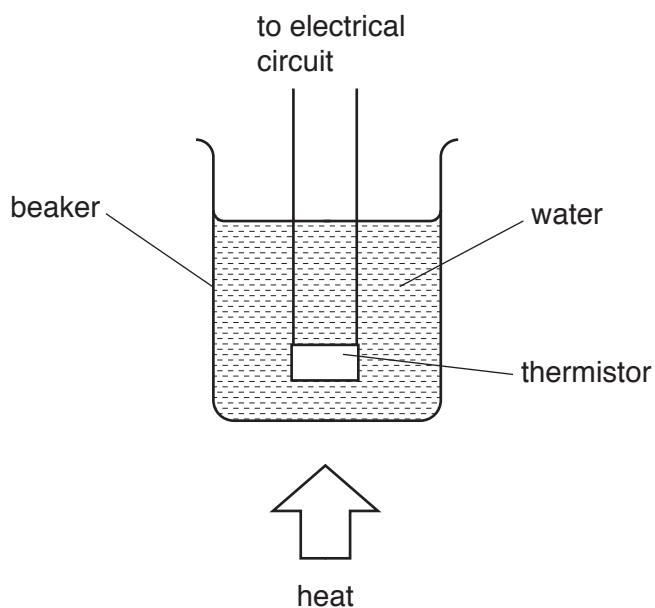


**Diagram**

A series of 18 horizontal dotted lines spanning the width of the page, intended for drawing a diagram.



- 2 A student is investigating how the resistance of a thermistor varies with temperature. The thermistor is placed in water, as shown in Fig. 2.1.



**Fig. 2.1**

The thermistor is connected to a battery with electromotive force (e.m.f.)  $E$  and negligible internal resistance. The current  $I$  in the thermistor is measured. The resistance  $R$  of the thermistor is then determined using the expression

$$R = \frac{E}{I}.$$

The experiment is repeated for different temperatures of the water.

It is suggested that the resistance  $R$  of the thermistor and the thermodynamic temperature  $T$  are related by the equation

$$R = pT^q$$

where  $p$  and  $q$  are constants.

- (a) A graph is plotted of  $\lg R$  on the  $y$ -axis against  $\lg T$  on the  $x$ -axis.

Determine expressions for the gradient and the  $y$ -intercept.

gradient = .....

$y$ -intercept = .....

[1]

(b) The value of  $E$  is  $9.4 \pm 0.1$  V.

Values of  $T$ ,  $I$  and  $\lg T$  are given in Fig. 2.2.

$T/K$	$I/\text{mA}$	$R/10^3\Omega$	$\lg(T/K)$	$\lg(R/10^3\Omega)$
303	$1.0 \pm 0.1$		2.481	
313	$1.6 \pm 0.1$		2.496	
323	$2.4 \pm 0.1$		2.509	
333	$3.7 \pm 0.1$		2.522	
343	$5.5 \pm 0.1$		2.535	
353	$8.7 \pm 0.1$		2.548	

**Fig. 2.2**

Calculate and record values of  $R/10^3\Omega$  and  $\lg(R/10^3\Omega)$  in Fig. 2.2.

Include the absolute uncertainties in  $R/10^3\Omega$  and  $\lg(R/10^3\Omega)$ .

[4]

(c) (i) Plot a graph of  $\lg(R/10^3\Omega)$  against  $\lg(T/K)$ .  
Include error bars for  $\lg(R/10^3\Omega)$ .

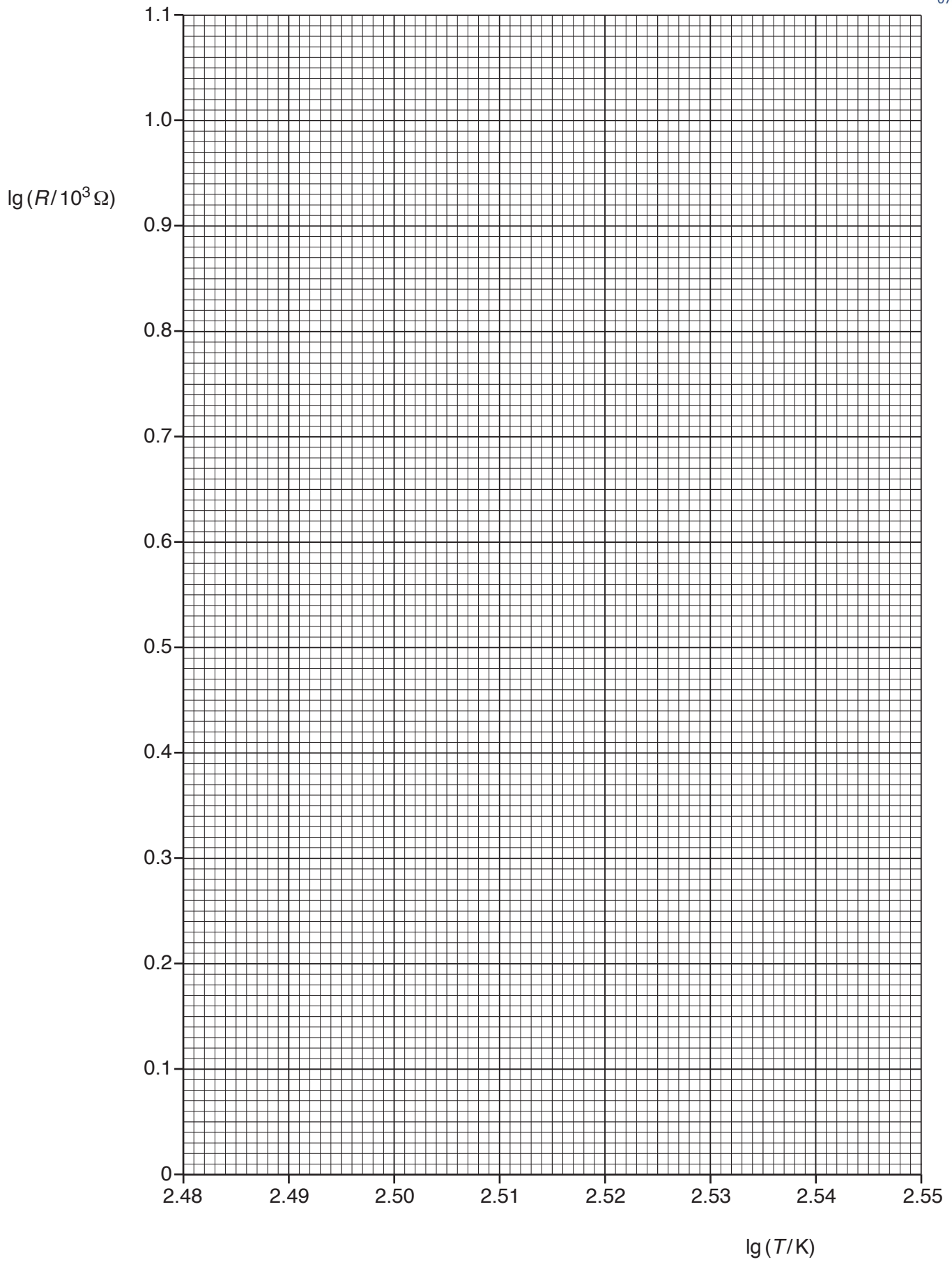
[2]

(ii) Draw the straight line of best fit and a worst acceptable straight line on your graph. Both lines should be clearly labelled.

[2]

(iii) Determine the gradient of the line of best fit. Include the absolute uncertainty in your answer.

gradient = ..... [2]



- (iv) Determine the  $y$ -intercept of the line of best fit. Do **not** determine the absolute uncertainty.

$y$ -intercept = ..... [1]

- (d) Using your answers to (a), (c)(iii) and (c)(iv), determine the values of  $p$  and  $q$ . You need not be concerned with units. Do **not** include the absolute uncertainties.

$p$  = .....

$q$  = .....

[2]

- (e) Using your answers to (d), determine the thermodynamic temperature  $T$  when the resistance of the thermistor is  $15\text{ k}\Omega$ .

$T$  = ..... K [1]

[Total: 15]